

Aşağıdaki sayıların aynadan yansıması verilmiştir. Yanlış olanı bulalım.

2
dakika


45



87




61




36



52



70



Adı: Soyadı: No:

