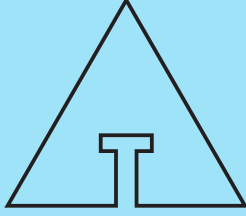


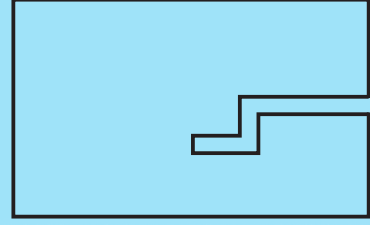
Şekillerden çıkarılmış olan parçayı bulalım.

5
dakika


1




2




3



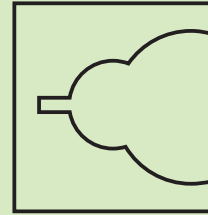
4



5



6



Adı: Soyadı: No:

